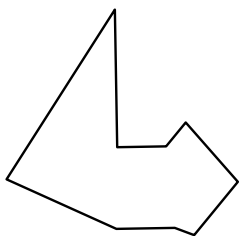




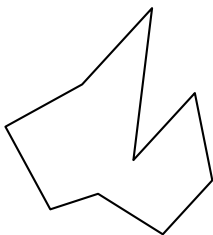
Identify the type of shape shown.

Answers

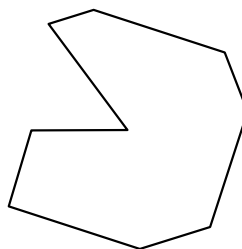
1)




2)



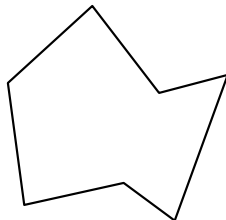
3)



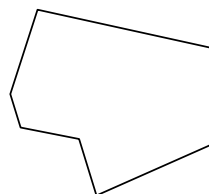
4)




5)




6)



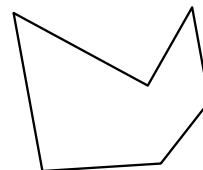
7)



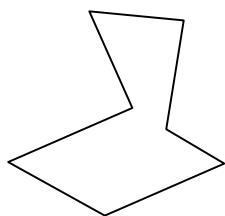
8)



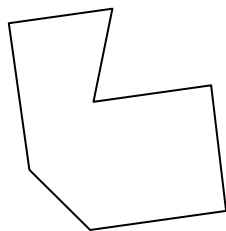
9)



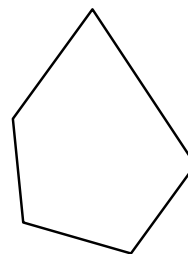
10)



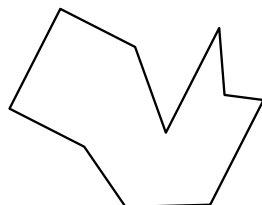
11)



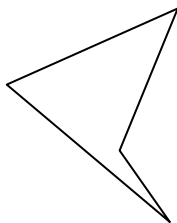
12)



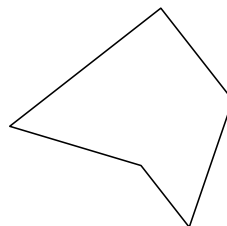
13)



14)



15)

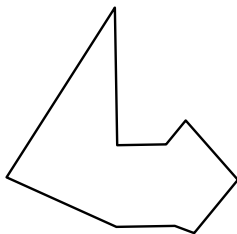


- 1. _____
- 2. _____
- 3. _____
- 4. _____
- 5. _____
- 6. _____
- 7. _____
- 8. _____
- 9. _____
- 10. _____
- 11. _____
- 12. _____
- 13. _____
- 14. _____
- 15. _____




Identify the type of shape shown.

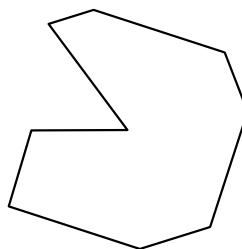
1)




2)



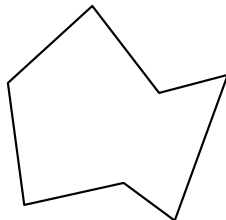
3)



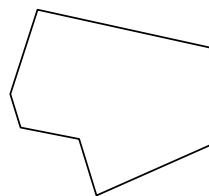
4)




5)



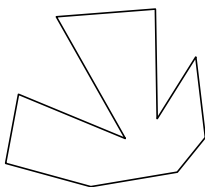
6)



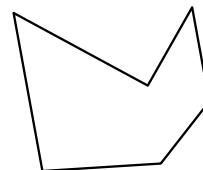
7)



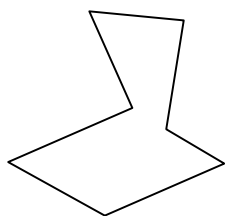
8)



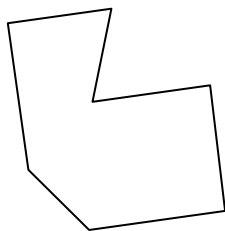
9)



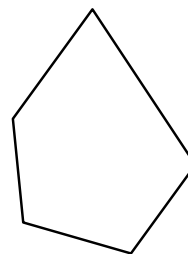
10)



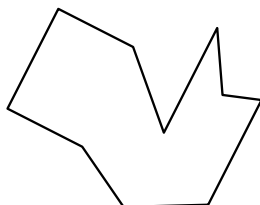
11)



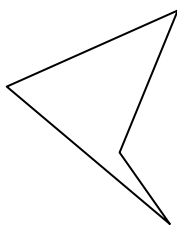
12)



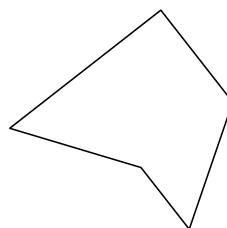
13)



14)



15)



Answers

1. nonagon

2. nonagon

3. nonagon

4. decagon

5. heptagon

6. heptagon

7. octagon

8. decagon

9. hexagon

10. heptagon

11. heptagon

12. pentagon

13. decagon

14. quadrilatera

15. pentagon